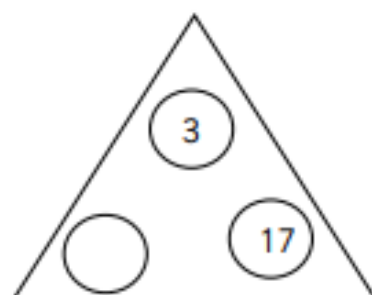


10 - Minute Maths


www.masterthecurriculum.co.uk



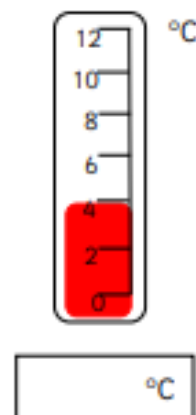
The numbers in the triangle add up to 30.
Write the missing number.



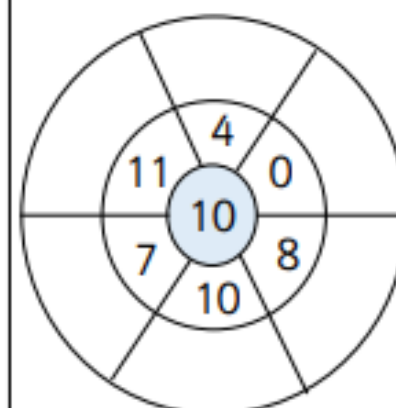
What fraction is shaded in?



What is the temperature on the thermometer?



Fill in the multiplication circle.




BM's favourite colour.
= 2 children.

Green	😊😊😊😊
Red	😊😊
Blue	😊😊😊😊😊😊😊😊
Yellow	😊😊😊

Write your own question about this data.

$$100 - 40 =$$



Fill in the missing number on the number lines.



www.masterthecurriculum.co.uk

10 - Minute Maths

www.masterthecurriculum.co.uk



What numbers are next?

14, 16, 18, _____, _____

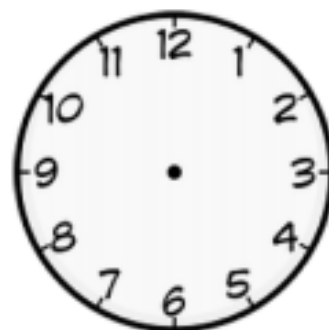
11, 21, 31, _____, _____

55, 60, 65, _____, _____

Draw a line of symmetry on each of the shapes.



Draw hands on the clock to show 9 o' clock.



Calculate the answers.

$$10 \times 3 = \boxed{}$$


$$5 \times 8 = \boxed{}$$

Tara's tally chart of the vehicles that drove past her house in one hour.

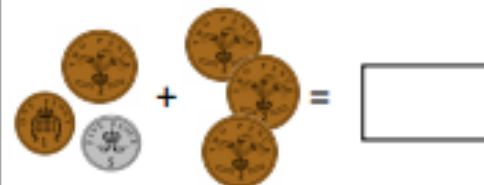
car	
van	
truck	
limousine	

How many vans and trucks did Tara see?

$$19 + 19 = \boxed{}$$



How much money altogether?



www.masterthecurriculum.co.uk

10 - Minute Maths

www.masterthecurriculum.co.uk



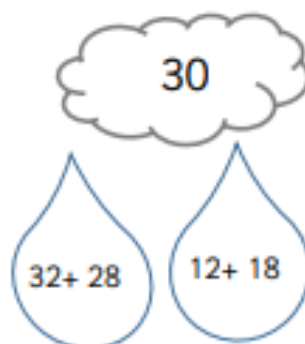
Sadie writes an answer to the calculation below.

$$47 - 21 = \boxed{26}$$

Write an addition calculation to check Sadie's answer.

$$\boxed{} + \boxed{} = \boxed{}$$

Colour in the rain drop you believe to be the correct estimate



How many 2s go into 20?


How many 2s go into 10?

Shade in $\frac{2}{4}$ of each of the bars below.

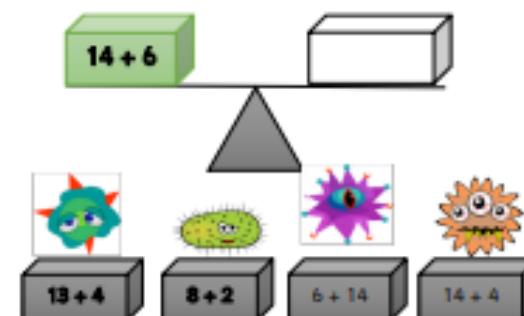
Partition this number in 4 different combinations of tens and ones.

38

$$40 - 32 =$$



Which alien holds the box that will balance the scales?



www.masterthecurriculum.co.uk

10 - Minute Maths

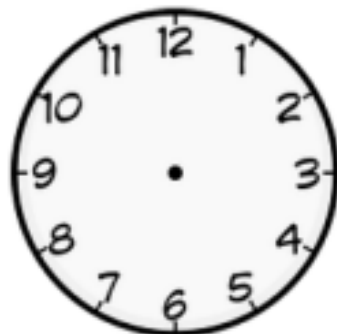
www.masterthecurriculum.co.uk



I have 4 marbles in one jar.
How many marbles do I have
to put in the other jar to
make 15? Draw them in.

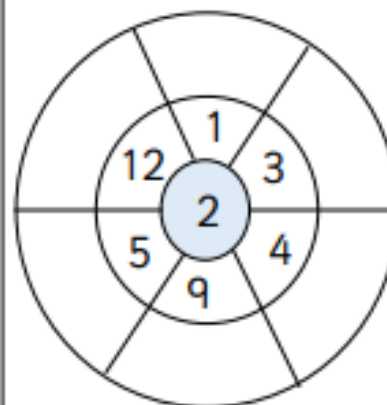


Draw hands on the clock to show
the given time.



45 minutes past 3 o' clock.

Fill in the multiplication circle.



What is the answer?




$$20 - 22 =$$

The teddy bear costs 75p. Using only silver
coins, how many different ways can you pay
for the bear?



$$5 \times 9 =$$



Write a digit in each box to make the sum
correct.

6		+		=	7	5
---	--	---	--	---	---	---

	5	+		=	3	1
--	---	---	--	---	---	---


www.masterthecurriculum.co.uk

10 - Minute Maths

www.masterthecurriculum.co.uk



Draw a line of symmetry
in the shape.

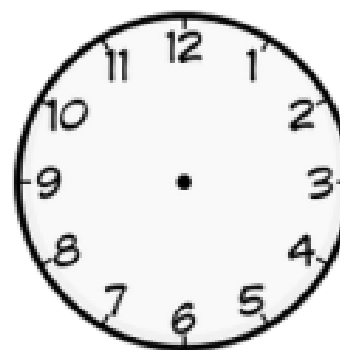


Calculate the answers.

$2 \times 8 =$

$5 \times 4 =$


Draw the minute hand on
the clock to show half past
11 o' clock.




Write the number of eggs on
the basket Farmer Joan needs
to get 14 altogether.



Circle all of the triangles.



$2 \times 11 =$



Use the numbers below to write
multiplication and division sentences.

10, 4, 40

www.masterthecurriculum.co.uk