

# 10 - Minute Maths



Answer the questions below.

How many 4s go into 40?

How many 3s go into 33?

How many 8s go into 64?

What is the number 50 less than 452?

What is the number 140 more than 661?

What fraction of the shape is shaded?



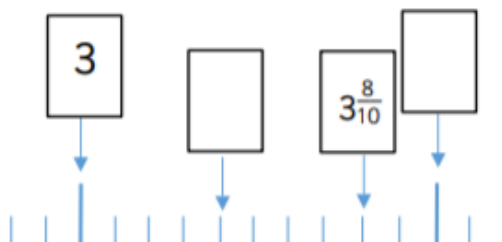
Work these calculations out mentally.

$$735 - 7 = \boxed{\phantom{000}}$$


$$123 - 13 = \boxed{\phantom{000}}$$

$$456 + 54 = \boxed{\phantom{000}}$$


Fill in the missing numbers from the number line.



$$8 \times 78 = \boxed{\phantom{000}}$$



School starts at 8:50. It takes me one hour to get there. What time do I need to leave home to get there at 8:50?



# 10 - Minute Maths




Write a 3 digit number with 9 in the tens place.

--	--	--

Write a 3 digit number with 4 in the hundreds place.

--	--	--

Sade's dad says they will go to the park at a quarter to 4. Draw hands to show this.



Rosie has  $\frac{2}{5}$  of 20 sweets.  
Leanna has  $\frac{1}{4}$  of 24 sweets.

Who has the most?  
Explain how you know.




What is three multiplied by eight?

What is eight multiplied by eleven?

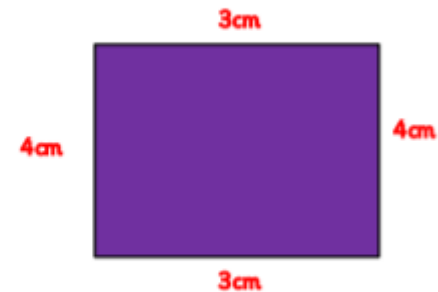
Class	Star of the week certificates for attendance ★ = 4 certificates
Blue	★ ★ ★
Red	★ ★
Yellow	★ ★
Green	★ ★
Purple	★ ★ ★

How many children received a certificate in blue class?

$$932 - 44 =$$




What is the perimeter of this shape?



# 10 - Minute Maths



Ria goes to bed at this time.



What time is her bedtime?

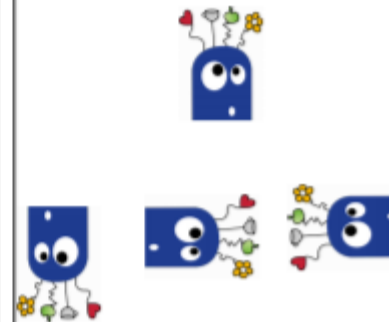
Write the number which represents the ones place

552	<input type="text"/>	863	<input type="text"/>
901	<input type="text"/>	100	<input type="text"/>
30	<input type="text"/>	32	<input type="text"/>

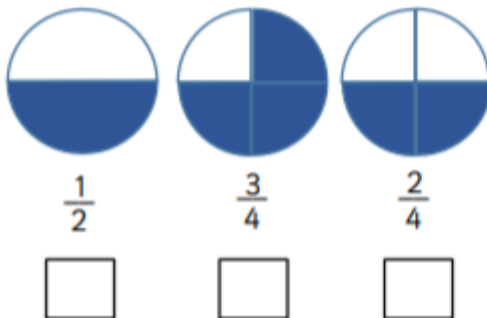
Finish the calculation using drawings.

	+		=	
	+		=	
$\frac{1}{8}$	+	$\frac{3}{8}$	=	


Circle the picture that shows the alien after turning 3 right angles clockwise.




Tick the equivalent fractions.



$643 - 631 =$



Draw a hexagon.




# 10 - Minute Maths



How many days are there between October 15<sup>th</sup> and November 3<sup>rd</sup>?

How many minutes are there between the times shown on these 2 clocks?

14:50




Draw a line to match the calculation to the correct answer.

$87 + 10 =$

$\frac{6}{10}$

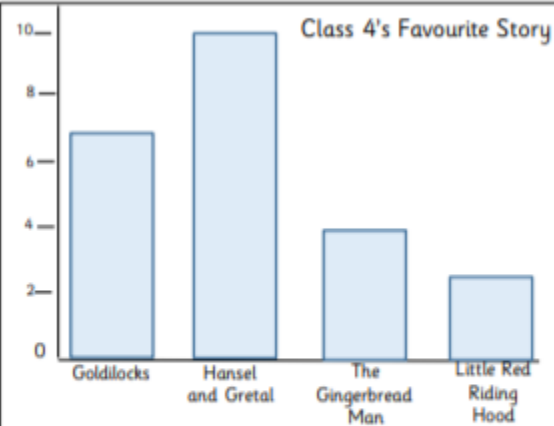
$6 \div 10 =$

9

$\frac{1}{2} \text{ of } 18 =$


97

Circle  $\frac{3}{6}$  of the apples.



How many more children chose Goldilocks than Little Red Riding Hood?

What number is 382 less than 628?



Write these numbers in words.

48 \_\_\_\_\_

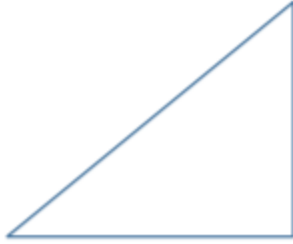
911 \_\_\_\_\_

808 \_\_\_\_\_

# 10 - Minute Maths

3

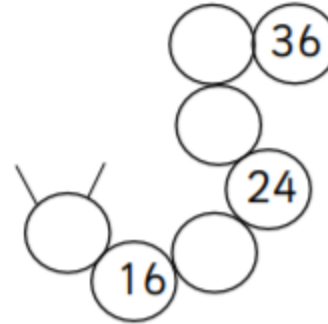
Circle the angles which are less than a right angle.



Circle 2 numbers that will add up to make a multiple of 5.

6 7 8 9 10 11 12

Continue the pattern on the caterpillar.



Calculate the answers mentally.

$$383 + 210 = \boxed{\phantom{000}}$$


$$921 - 300 = \boxed{\phantom{000}}$$

$$301 + 40 = \boxed{\phantom{000}}$$

Look at the shaded shape. Match each fraction to the correct place on the number line. One has been done for you.



$$643 - 631 = \boxed{\phantom{000}}$$



Minnie buys 3 bananas and 1 kilogram of strawberries. How much does she pay?



each banana 20p



£4 per kg