

10- Minute Maths

3

What is the time?



True or False?

You need a pair of lines to make a parallel line.

Horizontal lines go from right to left, or left to right.

Count in steps of 50 forwards

350

Count in steps of 100 forwards

500

Tick the angles that are greater than a right angle.




Look at the pictogram.

procedure	= 4
haircut	
wash	+ 1
blow dry	
colour	
style	+ 6

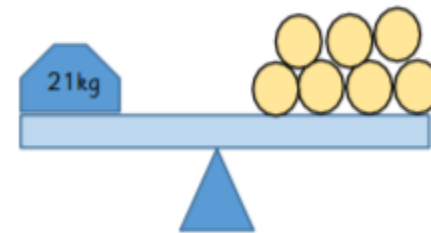
True or False?

Twice as many people got a haircut than a style.

$$392 - 367 =$$



Look at the balance scale.



What's the mass of 1 ?

10 - Minute Maths

3

Work out the calculations.

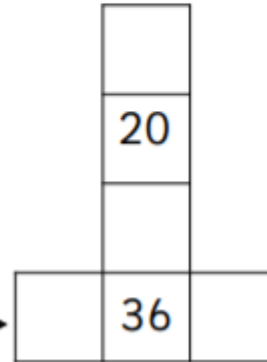
$$20\text{mm} + 10\text{cm} = \boxed{}$$

$$100\text{cm} + 1\text{m} = \boxed{}$$

$$5\text{m} - \boxed{} + 200\text{cm} = 4\text{m}$$

Count in steps of 8
forward

Count in
steps of 4
forward



What's my shape?

It has 6 faces
The edges are of equal
sides
The shape is:




Complete the table.

Roman Numeral	digits
VI	6
XI	
III	
	2

Circle the horizontal line.



$$43 \times 8 = \boxed{}$$



Why do you think more people went swimming on Saturday than any other day?

Day	People swimming	
Monday	= 3	
Tuesday	+ 1	
Wednesday	+ 1	
Thursday	+ 2	
Friday		
Saturday	+ 2	

10- Minute Maths



Count in steps of 10 from the given number.

43			
71			
0			
			88

Calculate the answer.

70 multiplied by 10 =

70 divided by 10 =

I'm thinking of a number using the number cards below.

The ones digit is odd.

The number is greater than 600 and less than 900.

What is my number?

3	7	9

Use the symbols

< = > to make the statements correct.

two hundred and sixty one 262

20 + 20 + 7 40 + 7

How much more do I need to add to make 700g?

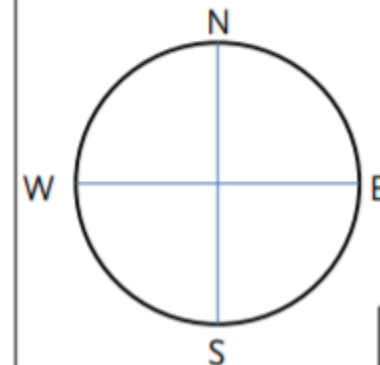


5 x 73 =



I am facing West. I turn clockwise until I am facing South.

How many right angles have I turned?




10- Minute Maths

3

Which is greater?

one tenth or one twelfth?

Draw hands to show 1 hour
before 3:15pm



Write these numbers in order
from the greatest to the
smallest.

878

787

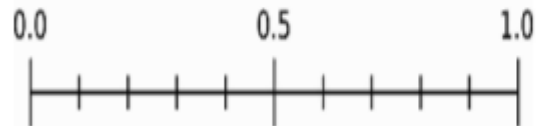
887

Name the shapes.






Draw an arrow on the number line to
show $\frac{1}{4}$.



$$428 + 224 =$$



Use the symbols
< = > to make the statements correct.

2 l

20 l

5000g

50k

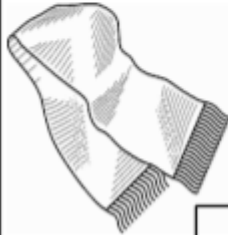
90cm

g
2m

10 - Minute Maths



Benji's scarf is 3 metres.
Hibda's scarf is 4 times as long.
How long is Hibda's scarf?



What does the number 9
represent in these numbers?
Ones, tens or hundreds?







How much money is there?



Draw a horizontal line.


Complete the statement to make it correct.
One has been done for you.

1 right angle = $\frac{1}{4}$ turn

4 right angles =

2 right angles =

$$492 - 104 = \text{ }$$



Use the symbols
< = > to make the statements correct.

120 minutes 1.5 hours

30 seconds $\frac{1}{2}$ a minute

15 minutes quarter of an hour