


# Measurement


## Challenge Cards



Which of these trees is the tallest? Which is the shortest? Can you draw two trees that are different sizes?



Tell a friend a story about Mr Tall and Mr Short.  
Use the words 'taller' and 'shorter'.

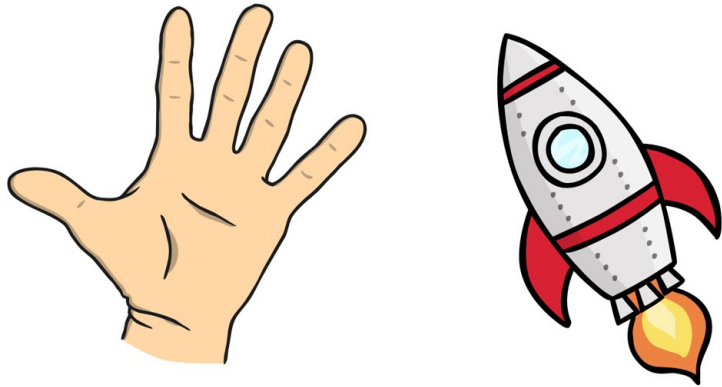


Which alien is double the length of the spaceship?

Which alien is half the length of the spaceship?




Draw a rocket that is longer than your hand. Now draw a rocket that is shorter than your hand.




Measure the rectangles. Which rectangle is 2cm long? 6cm long? 9cm long? Use a ruler.



Can you find 3 items around the classroom that are longer than 30cm?  
Can you find 3 that are shorter than 30cm?



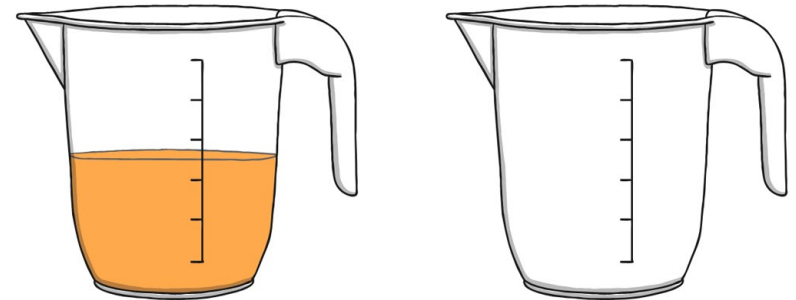
Which object is heavier? Which object is lighter?



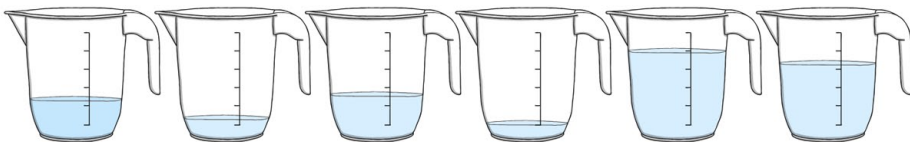
Find three objects in the classroom. Put them in order from heaviest to lightest.




Which container is half-full?  
Which container is empty?



Which two containers are more than half-full?



Which clock shows half past the hour?



Lily went to the park at 8 o'clock. She played there until 11 o'clock. How long did she play at the park?



Write the days of the week in the correct order.

Friday

Wednesday

Saturday

Tuesday

Thursday

Sunday

Monday

Which two coins do you need so that you can buy each of these items?



Jacob had a 10p coin. He spent 3p. How much did he have left?

