


Week 4 - 1

**Number: Addition and Subtraction**  
 Add three one-digit numbers.  
 Calculate the number sentences.



$6 + 3 + 2 =$

$5 + 2 + 5 =$

$9 + 4 + 1 =$

$7 + 4 + 2 =$


$3 + 8 + 4 =$

$1 + 6 + 5 =$


mastercurriculum.co.uk

Week 4 - 2




**Number: Addition and Subtraction**  
 To solve problems with addition and subtraction, using concrete objects and pictorial representations.




I buy 19 books and my brother buys 7 books. My mum returns 5 of them. How many did we get to keep altogether?




Calculate the answer:

 -  +  =

45 people choose a vegetarian meal for their work lunch. 23 people choose a vegan meal. How many meals need to be prepared altogether?



There are 23 people on a bus. 13 people get onto the bus. 3 stops later, 5 people get off of the bus. How many people are left on the bus?



mastercurriculum.co.uk

**Number: Multiplication and Division**  
 Recall and use multiplication and division facts for the 2, 5 and 10 multiplication tables

Fill in the missing numbers.

<input type="text"/> = $10 \div 2$	<input type="text"/> = $30 \div 5$
$40 \div 10 =$ <input type="text"/>	$5 \times 6 =$ <input type="text"/>
<input type="text"/> = $4 \times 5$	<input type="text"/> = $50 \div 10$
<input type="text"/> = $10 \times 12$	<input type="text"/> = $24 \div 2$
$45 \div 5 =$ <input type="text"/>	$12 \times 3 =$ <input type="text"/>

Answer the questions below.

How many 2s go into 16?	<input type="text"/>
How many 5s go into 20?	<input type="text"/>
How many 10s go into 40?	<input type="text"/>
How many 2s go into 40?	<input type="text"/>
How many 5s go into 45?	<input type="text"/>
How many 10s go into 100?	<input type="text"/>

mazzamathcurriculum.co.uk

**Number: Multiplication and Division**  
 Recognising odd and even numbers


Circle the odd numbers.

6      13      56  
 22      3      11      99


Circle the even numbers.

8      56      14  
 34      1      50      47

Do I have an odd amount of aliens or an even amount?




Do I have an odd amount of fruit or an even amount?




mazzamathcurriculum.co.uk

### Number: Multiplication and Division


Calculate mathematical statements for multiplication and division within the multiplication tables and write them using the multiplication (x), division (÷) and equals (=) signs.




A dog has 4 legs. There are 5 dogs.  
How many legs are there altogether?  
Write the multiplication story.




I have 15 cakes and want to share them with 5 people. How many do they get each?  
Write the division story to show this.



A spider has 8 legs. There are 10 spiders.  
How many legs are there altogether?  
Write the number sentences.



I have 20 pencils and 2 pots. I want an equal amount in each pot.  
How many will be in each pot?



waterfordcurriculum.co.uk