

Find the difference 1

1 Mo has 3 strawberries.

Kim has 5 strawberries.

Mo 

Kim 

How many more strawberries does Kim have than Mo?

Kim has more strawberries than Mo.

2 Ben has 4 cakes.

Jo has 8 cakes.

Ben 

Jo 


How many fewer cakes does Ben have than Jo?

Ben has fewer cakes than Jo.

3 Tom has 5 pencils.

Max has 8 pencils.



Tom 

Max 

What is the difference between the number of pencils?

The difference between the number of pencils is

4 Here is a bar model.



What does the bar model show?

What can you work out?