


1 Rosie has 15 cakes.



Her friends eat 6 cakes.

How many cakes does Rosie have left?

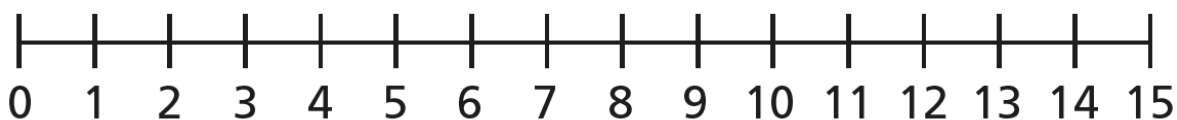
$$\square - \square = \square$$

Rosie has \square cakes left.

2 Jack has 13 stickers.

He gives 7 stickers to Dora.

How many stickers does Jack have left?



$$\square - \square = \square$$

Jack has \square stickers left.

- 3** Ron and Eva have worked out $12 - 5$ on a number line.

Ron's method



Eva's method



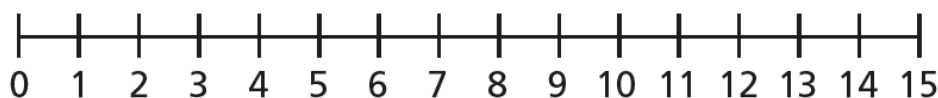
a) What is the same and what is different?

b) Use Eva's method to complete the subtractions.

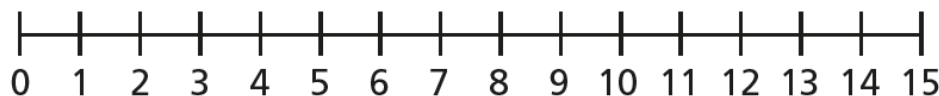
$$12 - 6 = \boxed{}$$



$$15 - 8 = \boxed{}$$



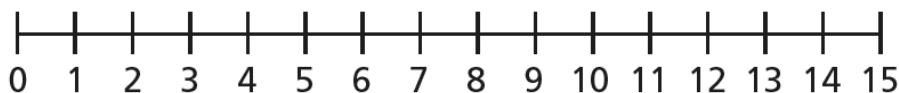
$$14 - 9 = \boxed{}$$



Deeper learners

- 4** Fill in the missing numbers.

$$14 - \boxed{} = 8$$



$$\boxed{} - 6 = 7$$

