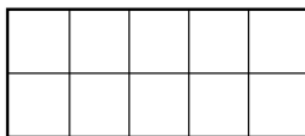
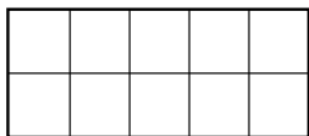


Tens and ones (2)

- 2 Draw counters to show 1 ten and 3 ones.



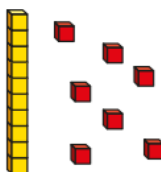
1 ten and 3 ones is equal to

- 3 Match the number sentences to the pictures.


1 ten and 7 ones



1 ten and 1 one



1 ten and 8 ones



- 4 Complete the sentences.

a) 1 ten and 6 ones =

b) = 1 ten and 3 ones

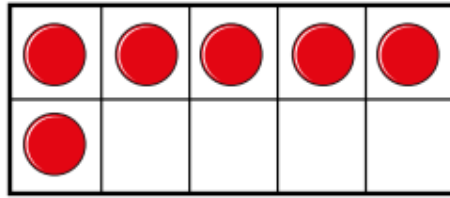
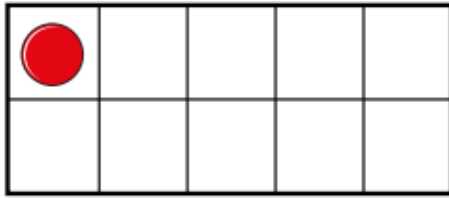
c) 15 = ten and ones

d) 2 tens =

e) 1 ten and 10 ones =

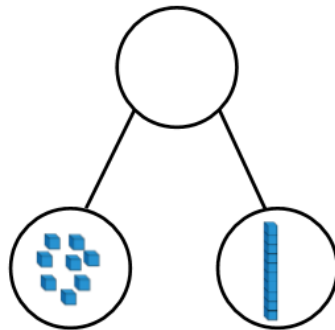
5 Is this true or false?

The ten frames show the number 16



Deeper Learners

Alex makes a part-whole model.



She says,



There are 8 tens and 1 one.

Explain her mistake.

What is her number?