

What's the Time Mr Wolf? (2)

Mr Wolf has managed to get all his times mixed up.
Can you match the time to the clock?

half past 11



half past 3



4 o'clock

half past 6



8 o'clock



2 o'clock

half past 7



half past 9



half past 10



12 o'clock



5 o'clock

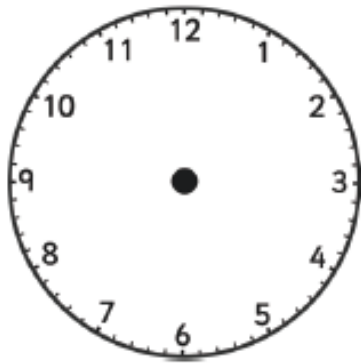


1 o'clock

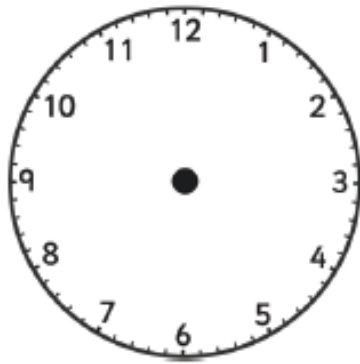


What's the Time Mr Wolf? (3)

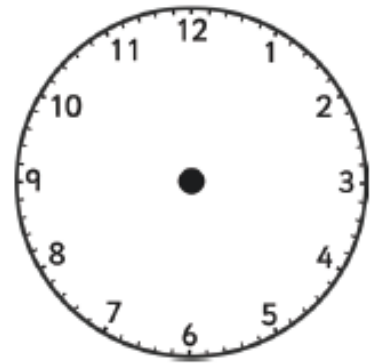
Mr Wolf has stamped around his house so much that all the hands have fallen off his clocks! Can you draw the hands on the clocks to show the right times? Remember to make the minute hand longer than the hour hand.



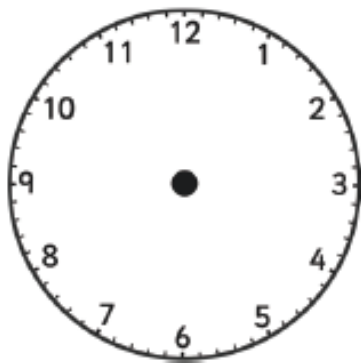
8 o'clock



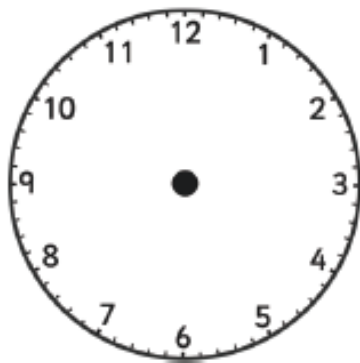
11 o'clock



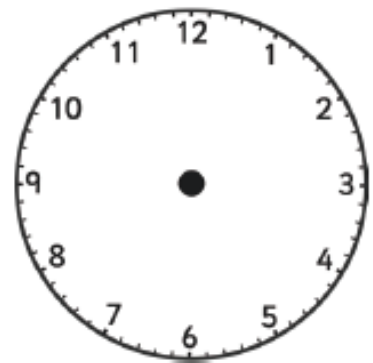
half past 5



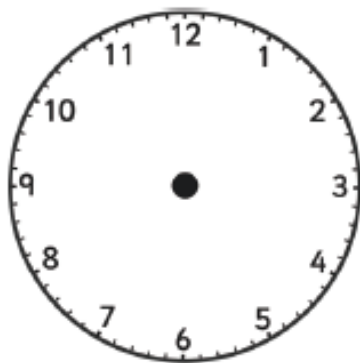
half past 7



2 o'clock



3 o'clock



half past 1