
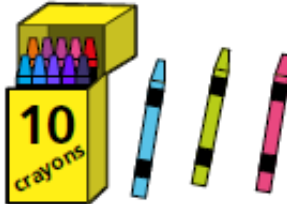
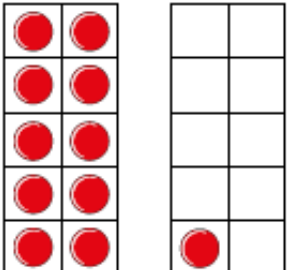


Numbers from 11 to 20

**I** Complete the table.

Picture	Numeral	Word
	20	
		
		
	12	
		seventeen

- 2 Draw counters to show 14 in three different ways.

a)



b)

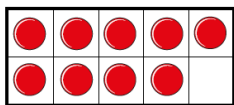
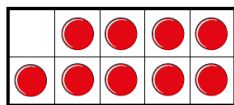


c)



3

I have made  
the number 19



Has Teddy made the number 19?

## Deeper Learning

Teddy says,



I can make all the  
numbers from eleven  
to twenty using the  
digits 1 – 9

Do you agree?  
Explain your answer.

1	2	3	4	5	6	7	8	9
---	---	---	---	---	---	---	---	---