

Compare groups of objects

1 Annie and Tommy have these sweets.



Annie



Tommy



a) Who has the least sweets? _____

Complete the sentence.

is less than

b) Who has the most sweets? _____

Complete the sentence.

is more than

2 Teddy and Amir have these cookies.

Teddy



Amir



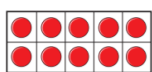
Who has the most cookies? _____

How do you know?

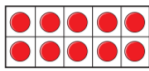
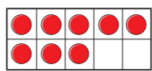
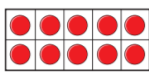
Complete the sentence.

is more than

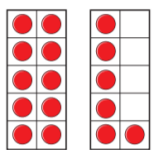
3 Write greater or less to complete the statements.



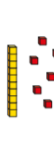
is _____ than



is _____ than



is _____ than



4 Draw counters to make the statement true.

a)

is greater than

b)

is less than

c)

is equal to

Is there more than one answer for each?