

Compare statements 1

1 Kim has these pennies.



Her mum gives her 2 more pennies.

Ron has 5 pennies.

Who has more pennies?

_____ has more pennies.

2 Complete the statements in two ways.

a) $5 + 2$ is greater than

$5 + 2$ is greater than

b) $5 - 2$ is greater than

$5 - 2$ is greater than

c) 6 is greater than

 +

6 is greater than

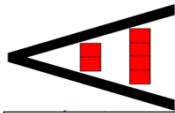
 +

d) 6 is greater than

 -

6 is greater than

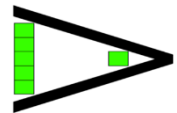
 -



Less than



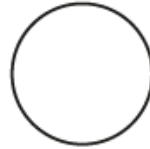
Equal to



Greater than

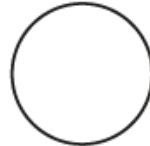
3 Write $<$, $>$ or $=$ to complete the statements.

$1 + 0$



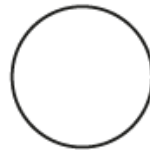
1

$1 - 0$



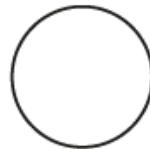
1

$10 - 0$



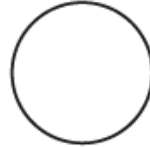
1

$4 + 3$



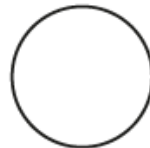
6

8



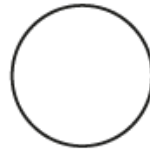
$10 - 1$

$6 - 5$



1

4



$2 + 3$